

Class 3 maths fraction worksheet pdf


Class 3 maths fraction worksheet pdf


Rating: 4.5 / 5 (3651 votes)


Downloads: 45958


CLICK HERE TO DOWNLOAD >>> <https://myvroom.fr/7M89Mc?keyword=class+3+maths+fraction+worksheet+pdf>

a) True b) False There could be fractions whose denominator can be zero. a) True b) False when the numerator and denominator are equal, the fraction represents 1 Example: $\frac{1}{1}$ Shade the fraction bars for the equivalent mixed number. No login required a) $\frac{8}{7}$ and $\frac{7}{4}$ b) $\frac{4}{2}$ and $\frac{2}{7}$ c) $\frac{2}{7}$ and $\frac{2}{7}$ d) None of these In a fraction numerator should be greater than denominator. - Write the missing fractions in The above practice worksheet for Fraction has been designed as per the current syllabus for Class Mathematics released by CBSE. Read and download free pdf of CBSE Class Mathematics Fractions Worksheet Set E. Students and teachers of Class Mathematics can get free printable Worksheets for Free 3rd grade fractions andimals worksheets, including writing and comparing fractions, equivalent fractions, simplifying fractions, adding and subtracting fractions with like denominators, completing whole numbers, improper fractions, mixed numbers and simple imals. What fraction of chocolate she distributed and what fraction remained with her? te the missing fractions in. mple: $\frac{2}{2}$ Shade the pie models for the equivalent mixed number 3rd grade fractions worksheets help in providing practice questions on introductory fraction concepts including identifying fractions, equivalent fractions, simplifying Grade fractions worksheets pdf Learn how to identify different fraction values from shapes, learn adding fractions, subtracting & more A class teacher got chocolates, she distributed chocolates among her students. Students studying in Class can easily download in Pdf format and practice the questions and answers given in the above practice worksheet for Class Mathematics on a daily basis The CBSE grade maths worksheet is available for download in free printable PDF format at CBSE Class Maths Fractions Worksheet questions with answers created by a subject expert as per the latest syllabus mple: $\frac{2}{2}$ Shade the pie models for the equivalent mixed number. Example: $\frac{2}{2}$ Shade the fraction bars for the equivalent mixed number.

 Difficulté Moyen

 Durée 241 heure(s)

 Catégories Bien-être & Santé, Jeux & Loisirs, Robotique

 Coût 474 USD (\$)

Sommaire

Étape 1 -

Matériaux

Outils

Étape 1 -
