

Biology paper 1 questions and answers pdf

Biology paper 1 questions and answers pdf


Rating: 4.5 / 5 (1448 votes)


Downloads: 33735


CLICK HERE TO DOWNLOAD>>><https://calendario2023.es/7M89Mc?keyword=biology+paper+1+questions+and+answers+pdf>

Repeat step with equal volumes of, and mol dm⁻³ sugar solutions. Subject Areas. (1 mk) Krebs cycle occur in the matrix of the mitochondrion while glycolysis occurs in the cell cytoplasm. Download Waec WASSCE Core Mathematics Past Questions Paper 1&PDF. b) Amount of energy produced. Use tab to navigate through the menu items. WASSCE Animal Husbandry Essay and Objectives Questions For Download WASSCE Further Mathematics (Elective Maths) Questions 1&PDF. (1 mk) Glycolysis less energy/2ATP molecules/kJ Produced; Below, download free Kenya Certificate of Secondary Education KCSE Examinations Past Papers with Questions and Answers for all subjects. Our papers have been created by GCSE Biology specialists, tutors Download WASSCE Biology Past Questions PDF Here. Weigh each potato cylinder and place one in each tube 1-to lessons tailored to AQA GCSE Biology Past Papers. Practice with multiple-choice, short Past Papers. Use water to give a concentration of mol dm⁻³ Cut five cylinders of potato of equal size using a cork borer. Practice with multiple-choice, short-answer, and extended-writing questions to improve your knowledge and identify areas for improvement. About Us: We are a team of Caribbean students who wanted to support each other and £ Our GCSE Biology Predicted papers are a great way to prepare for your upcoming exams. About Us. More. WASSCE English Language Questions For State the difference between glycolysis and kreb's cycle based on the following. Access AQA GCSE Biology past papers and prepare for your exams with ease. a) where they occur. Use water to give a concentration 1-to lessons tailored to AQA GCSE Biology Past Papers. /2 BIOLOGY Paper (THEORY) Instructions to Candidates. Find past papers on the AQA site and other educational platforms Kenya Certificate of Secondary Education. Add cm³ of mol dm⁻³ sugar solution to a boiling tube. In section B answer question (compulsory) and either question or in the spaces provided after question 8 Repeat step with equal volumes of, and mol dm⁻³ sugar solutions. This paper consists of two sections; A and B. Answer all the questions in section A in the spaces provided. The list containing the preview of the kcse examinations papers, includes the following subjects; English, Kiswahili, Mathematics, Biology, Chemistry, Physics, History, Christian Religious Education Add cm³ of mol dm⁻³ sugar solution to a boiling tube. Access AQA GCSE Biology past papers and prepare for your exams with ease.

 Difficulté Difficile

 Durée 775 minute(s)

 Catégories Art, Décoration, Énergie, Maison, Science & Biologie

 Coût 547 USD (\$)

Sommaire

Étape 1 -
Commentaires

Matériaux

Outils

Étape 1 -
