

Ap calculus ab unit 2 review pdf

Ap calculus ab unit 2 review pdf


Rating: 4.7 / 5 (1646 votes)


Downloads: 18248


CLICK HERE TO DOWNLOAD >>> <https://myvroom.fr/7M89Mc?keyword=ap+calculus+ab+unit+2+review+pdf>

As a result, it is essential for you to understand these concepts! Divided into units for easy review. Phillips Academy was one of the first schools to teach AP® nearly years ago. Make sure you get the basics down of unit of AP Calculus AB for this unit sets the foundations of calculus, which is essentially the rest of the course. Use the point-slope formula to write the equation of your line $y - y_1 = m(x - x_1)$. Find $f'(x)$ for $f(x) = \cot(x)$. Find the derivative: $f'(x) = -\csc^2(x)$. Find an equation for the tangent line to the graph of $f(x) = \sec(x)$ at the point where $x = \frac{\pi}{4}$. Find the values of x for all points on the graph of $f(x) = \sec(x)$ at which the slope of the tangent line is 4. Find the values of x for all points on the graph of $f(x) = \sec(x)$ at which the slope of the tangent line is -4. Meet an AP® teacher who uses AP® Calculus in his classroom. Bill Scott uses Khan Academy to teach AP® Calculus at Phillips Academy in Andover, Massachusetts, and he's part of the teaching team that helped develop Khan Academy's AP® lessons. An amazing set of AP Calculus AB notes. Get on the AP Calculus exam with this awesome review guide for unit 2! Available in HTML or PDF files. Learn AP® Calculus AB—everything you need to know about limits, derivatives, and integrals to pass the AP® test. If $f(2) = 3$ and $f'(2) = -1$, find the equation of the tangent line when $x = 2$. Find the equation of the tangent line to the graph of $f(x) = x - x^2$ when $x = 1$. Note that the slope is -2 and the given point is the ordered pair (2, 3). Differentiate $y = \cot(x)$. Find $f'(x)$ for $f(x) = \cot(x)$. Find the derivative: $f'(x) = -\csc^2(x)$. Find an equation for the tangent line to the graph of $f(x) = \sec(x)$ at the point where $x = \frac{\pi}{4}$. Find the values of x for all points on the graph of $f(x) = \sec(x)$ at which the slope of the tangent line is 4. AP CALCULUS AB REVIEW SHEET LIMITS $\lim_{x \rightarrow L} f(x) = L$ exists if and only if $\lim_{x \rightarrow L^-} f(x) = \lim_{x \rightarrow L^+} f(x) = L$. $\lim_{x \rightarrow 0} \frac{\sin x}{x} = 1$, $\lim_{x \rightarrow 0} \frac{\cos x - 1}{x} = 0$, $\lim_{x \rightarrow \infty} \frac{1}{x} = 0$, $\lim_{x \rightarrow 0} \sin 2x = 0$. AB Notes.

 Difficulté Très facile

 Durée 486 jour(s)

 Catégories Science & Biologie

 Coût 549 USD (\$)

Sommaire

Étape 1 -

Commentaires

Matériaux

Outils

Étape 1 -
