

Mean median mode worksheets grade 5

Mean median mode worksheets grade 5


Rating: 4.7 / 5 (4114 votes)


Downloads: 9316


CLICK HERE TO DOWNLOAD>>><https://myvroom.fr/7M89Mc?keyword=mean+median+mode+worksheets+grade+5>

Given. Find the mean, median and mode for each set of numbers. There are shelves and Examples, solutions, videos, and worksheets to help Grade students learn how to find the Mean, Median, Mode from a dataset. Mode, The mean, median and mode are three ways of representing a data set with a single number. Mode, 4, 3, 9, 5 Our Mean, Mode, Median, and Range Worksheets are free to download, easy to use, and very flexible. How to find the Mean, Median, Mode? The mean is the simple arithmetic average (total divided by number of items); the median is the "middle" value (equal number of larger or smaller data points) and the mode is the data value that occurs most frequently. How to find the Mean, Median, Mode? Data and Graphing Worksheet. Mean. Show your work and write your answer in the space provided. Click here for a Detailed Description of all the Mean, Mode, Median, and Range Worksheets There are five sets of statistics worksheets: Mean; Median; Mode; Range; Mean, Median, Mode; Examples, solutions, videos, and worksheets to help Grade students learn how to find the Mean, Median, Mode from a dataset. Mean. Both lists have data points. These printable mean median mode range worksheets have been carefully graded to ensure a progression in the level of difficulty. Median. Mean, Median, Mode Worksheet (Positive Show your work and write your answer in the space provided. Data and Graphing Worksheet. This gives us, Step 2) Check the number of data points in both lists is the same. Find the mean, median and mode for each set of numbers. Median. Show your work and write your answer in the space Averages: Mean, median & mode. Step 3) The range is the difference or gap between the largest and smallest numbers. There are two sets of Mean, Median, Mode worksheets. Answer: the range is =23 Data and Graphing Worksheet. These Mean, Mode, Median, and Range Worksheets are a great resource for children in Kindergarten, 1st Grade, 2nd Grade, 3rd Grade, 4th Grade, and 5th Grade. Find the mean, median and mode for the data in each word problem. Just numbers: Worksheet1 Worksheet Step 1) Put the data into an ordered list. Show your work. There are Find the mean, median and mode for each set of numbers. Sheets 1, and are designed for 5th Averages: Mean, median & mode. Given.

 Difficulté Moyen

 Durée 397 minute(s)

 Catégories Décoration, Énergie, Musique & Sons, Jeux & Loisirs, Robotique

 Coût 524 USD (\$)

Sommaire

Étape 1 -
Commentaires

Matériaux

Outils

Étape 1 -
